

Measurement

Time



Our puppies were all born in the early hours of the morning. Write the times shown on each clock.

What time was Elmo born?



Minutes past

What time was Milly born?



Minutes past

What time was Lola born?



Minutes to

What time was Baxter born?



Minutes to

What time was Inca born?



Minutes past

What time Goldie was born?




Minutes past

Measurement

Time

Our puppies were all born in the early hours of the morning. Draw the hands on the clocks for the time each puppy was born.

Draw the hands on the clock for the time Kira was born:




5 minutes past 4

Draw the hands on the clock for the time Ford was born:




Half past 6

Draw the hands on the clock for the time Dell was born:



15 minutes to 6

Draw the hands on the clock for the time Arrow was born:




4 o'clock

Draw the hands on the clock for the time Jessie was born:



10 minutes past 5

Draw the hands on the clock for the time Chaz was born:



5 minutes past 6

Use table one to help you sort the puppies into the order they were born. Write their names and the times in table two starting with the puppy that was born first.

Table 1

Time	Name
04:25	Inca
04:00	Arrow
06:08	Milly
05:10	Jessie
06:10	Elmo
05:45	Dell
04:10	Goldie
04:05	Kira
05:55	Baxter
04:45	Lola
06:05	Chaz
06:30	Ford

Table 2

Time	Name
:	
:	
:	
:	
:	
:	
:	
:	
:	
:	
:	

Our puppies are fed 3 times a day when they start eating solid food. These are the times Abby’s pups are fed. Draw lines to match the times to the clocks showing the same time.

9 o'clock in the morning



14:30

Half past 2 in the afternoon



09:00

Quarter to 8 in the evening



19:45